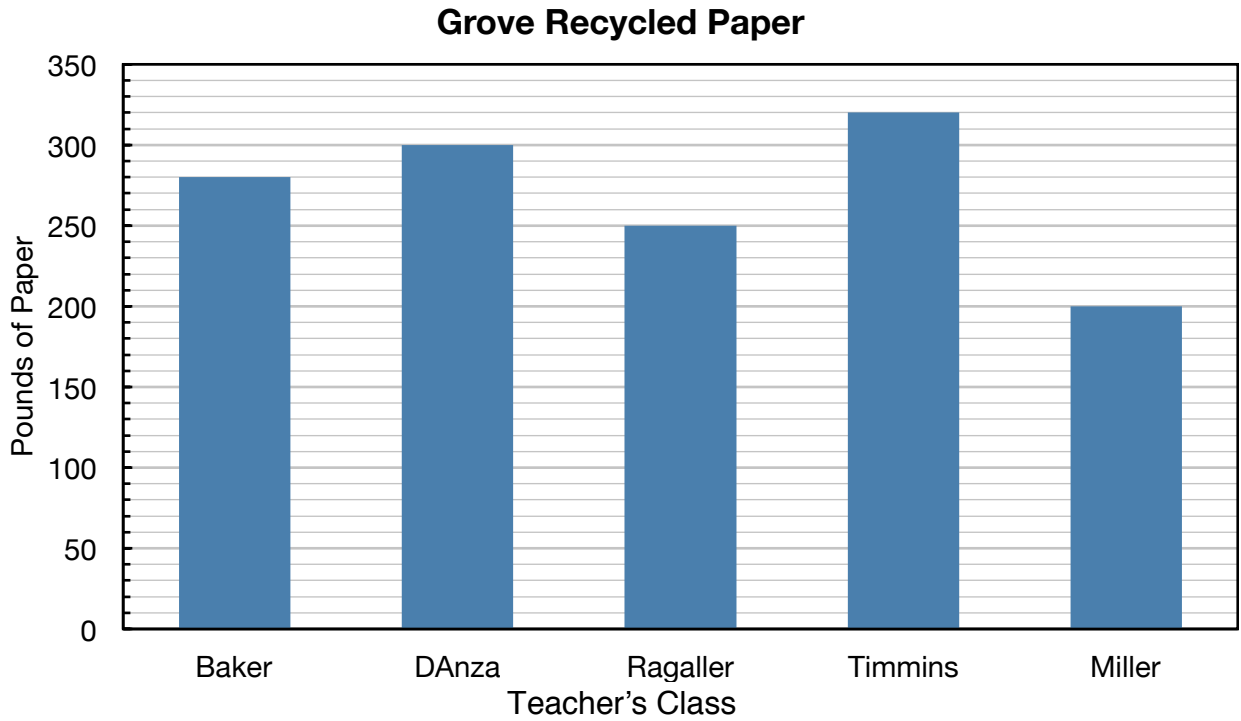
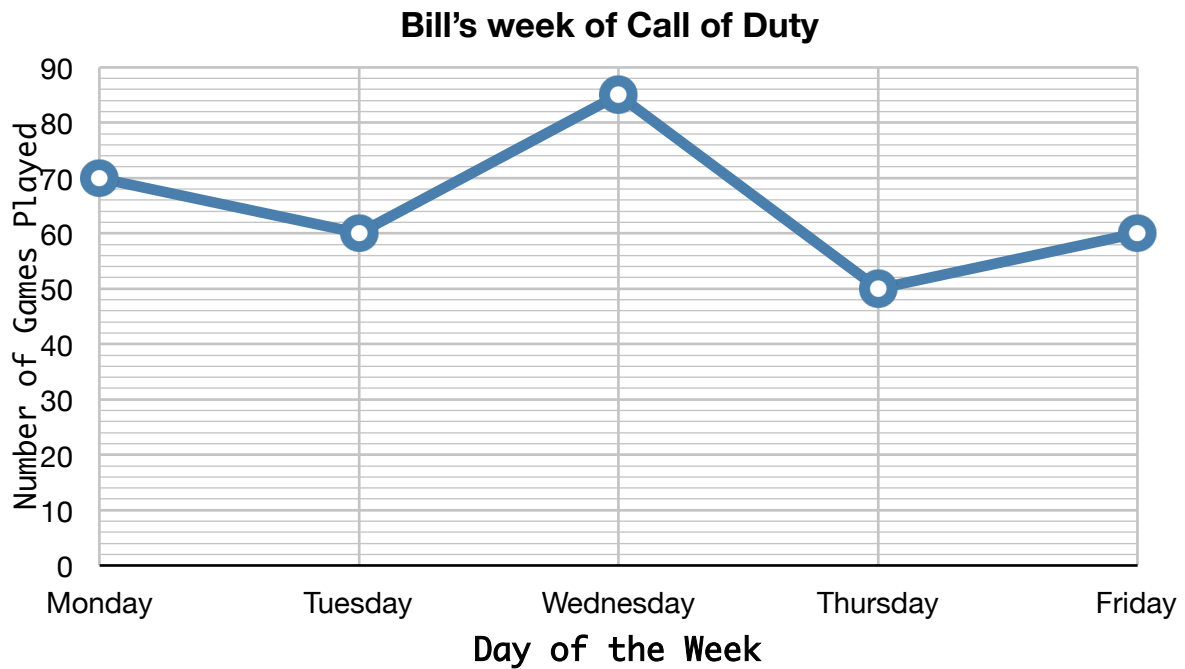


Name: _____



1. What is the title of this graph?
2. What is the label for the X axis?
3. What is the label for the Y axis?
4. How many pounds of newspaper did Baker's class recycle?
5. How many pounds of paper did Timmin's class recycle?
6. Which class recycled 250 pounds of paper?
7. How many more pounds of paper did DANza's class recycle than Miller's class?
8. How many total pounds of paper were recycled?

9. What is the title of this graph?



10. What is the label for the Y axis?

11. What is the label for the X axis?

12. What day of the week did Bill play the most games?

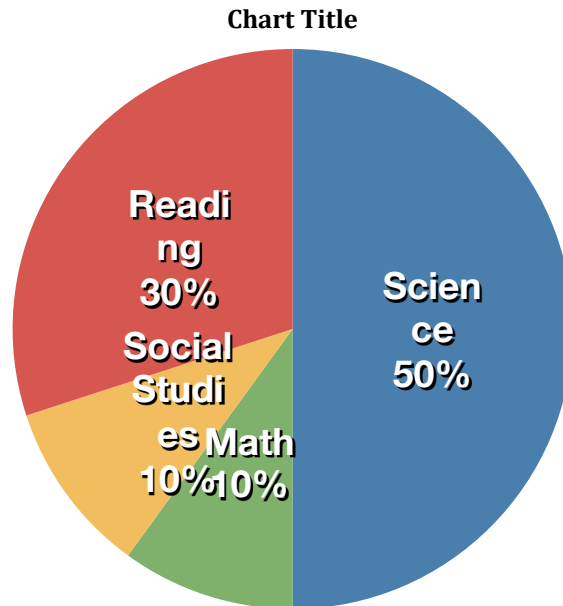
13. How many games did he play on Thursday?

14. Which 2 days did Bill play exactly 60 games?

15. How many total games this week did Bill play in all?

Mr. Steven's asked his students to vote on which class they liked the most during the day, the choices he gave them were: Science, Math, Reading and Social Studies. All 30 students cast one vote each. The pie graph below shows the results.

16-19. Complete the table below to show how many votes each class received:



Class	Number of Votes
Reading	
Social Studies	
Math	
Science	

20. How many more students chose science over math?
21. How many students chose Reading and Social Studies combined?